

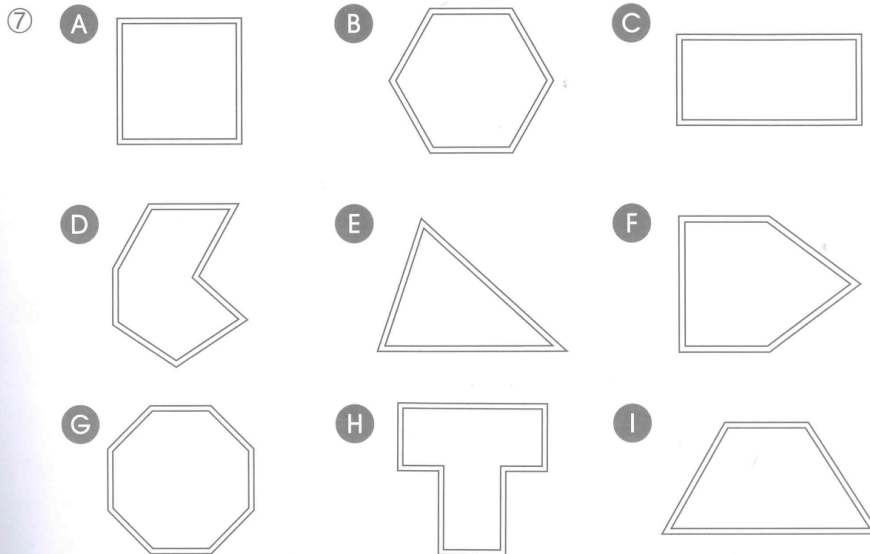
# Geometry and Spatial Sense

Grade 1  
Diagnostic

Name: \_\_\_\_\_

Diagnostic - checking to see what they already know	Target Met	Still Progressing
Classify common two-dimensional shapes.		
Identify common two-dimensional shapes.		

**Trace the sides and circle the vertices of each shape with a red coloured pencil. Then answer the questions.**



- ⑧ a. Which shape has 5 sides? \_\_\_\_\_  
 b. Does the shape also have 5 vertices? \_\_\_\_\_
- ⑨ a. Which shapes have 4 vertices? \_\_\_\_\_  
 b. How many sides does each shape have? \_\_\_\_\_ sides
- ⑩ Draw a hexagon which is different from the one above.



Circle •

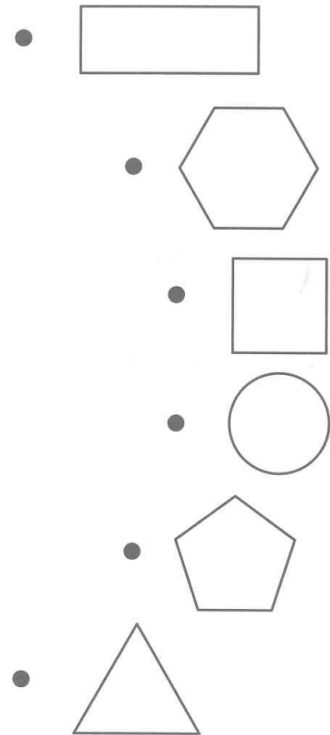
Hexagon •

Pentagon •




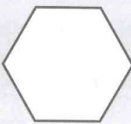

Rectangle •

Square •

Triangle •



***Name the shapes and write the number of sides and vertices of each shape.***

					
⑤ Name					
⑥ Number of sides					
⑦ Number of vertices					