

# Geometry and Spatial Sense


Grade 2  
Diagnostic

Name: \_\_\_\_\_

Diagnostic - checking to see what they already know	Target Met	Still Progressing
1. Locate the line of symmetry.		
2. Identify 2D shapes		
3. Compose and decompose 2D & 3D		
4. Describe relative locations of objects		

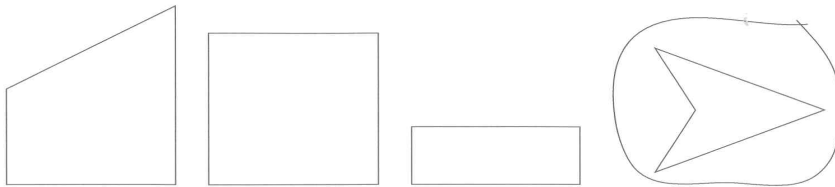
Circle the butterflies that have a line of symmetry.

Bonus: Draw the line of symmetry



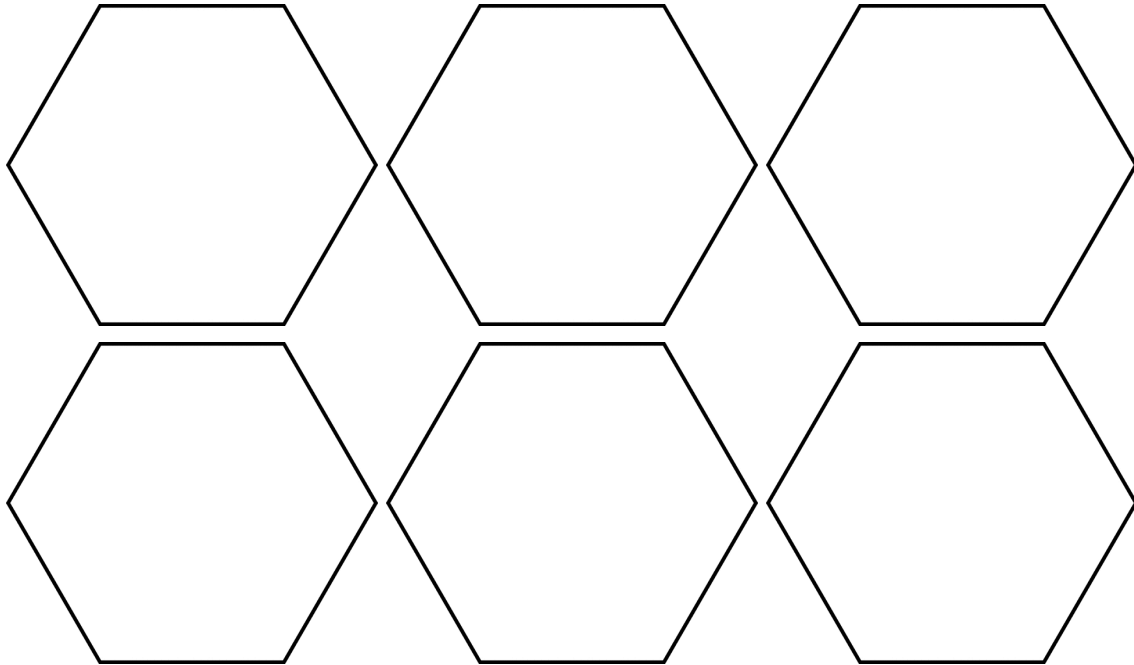
Jack made a group of 4 shapes.  
He circled one that doesn't belong.

- What could Jack's sorting rule be?




sorting rule: \_\_\_\_\_

How many different ways can you fill a hexagon with pattern blocks?



Use positional words to complete the statements about the playground.



- a) The see-saw is \_\_\_\_\_ the slide.
- b) The swings are \_\_\_\_\_ the hanging bars  
and \_\_\_\_\_ the slide.