



Can you tell what time it is?
How do you know?



The image shows an analog clock with a large red arrow pointing from the center to the 12 o'clock position. The numbers 1 through 12 are arranged around the clock face.

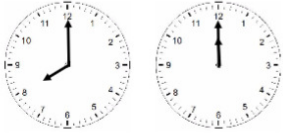
Mar 24-5:43 PM

What is the area of this square? _____



Explain how you know:

Mar 24-5:45 PM

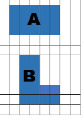


8:00 or 12:00

Which time is closer to lunch?
Explain how you know.

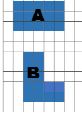
Mar 24-5:46 PM

Which of these two shapes has the greatest perimeter?



Shape _____ has the greatest perimeter.
Explain how you know:

Which of these two shapes has the greatest area?



Shape _____ has the greatest area.
Explain how you know: